


A pig has 4 legs.

How many legs do 2 pigs have?



How many legs do 3 pigs have?



How many legs do 4 pigs have?




How many legs do 5 pigs have?




How many legs do 6 pigs have?





A duck has 2 legs.


How many legs do 2 ducks have?




How many legs do 3 ducks have?




How many legs do 4 ducks have?



How many legs do 5 ducks have?




How many legs do 6 ducks have?

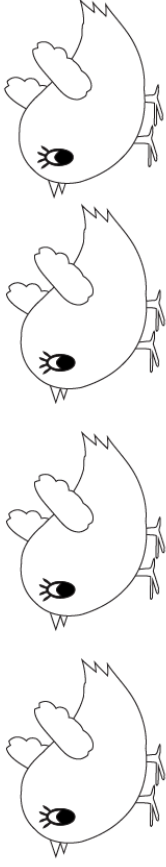


A bird has 2 wings.


How many wings do 3 birds have?



How many wings do 4 birds have?



How many wings do 5 birds have?



How many wings do 6 birds have?

